

# FIND THE TIME

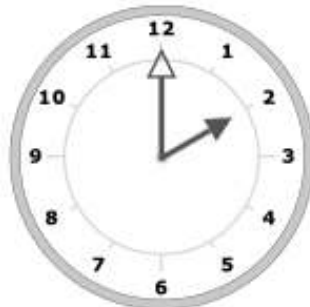
NAME: \_\_\_\_\_

DATE: \_\_\_\_\_

Write the time for each pair of clocks. Then find the amount of time that has passed between the two times.



10:30 a.m.



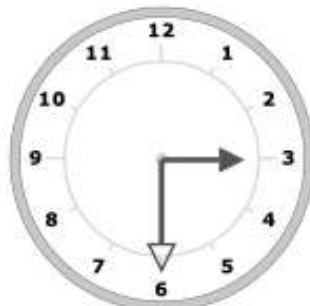
2:00 p.m.

How much time has passed?

3 hrs 30 mins



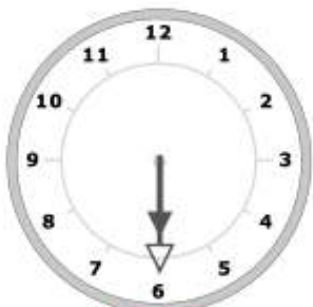
8:00 a.m.



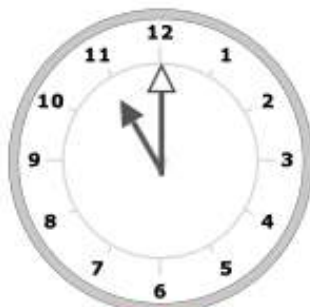
3:30 p.m.

How much time has passed?

7 hrs 30 mins



6:30 p.m.



11:00 p.m.

How much time has passed?

4 hrs 30 mins



11:30 p.m.



5:00 a.m.

How much time has passed?

5 hrs 30 mins

