

PASSING TIME: QUARTER HOURS

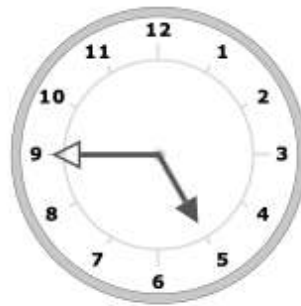
NAME: _____

DATE: _____

Write the time for each pair of clocks. Then find the amount of time that has passed between the two times.

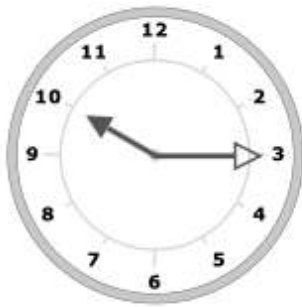


_____ p.m.

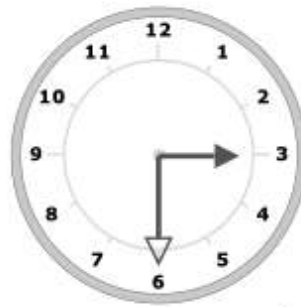


_____ p.m.

How much time has passed?



_____ a.m.

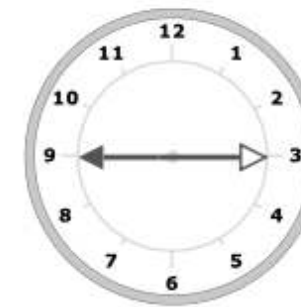


_____ p.m.

How much time has passed?



_____ p.m.



_____ p.m.

How much time has passed?



_____ a.m.



_____ p.m.

How much time has passed?

