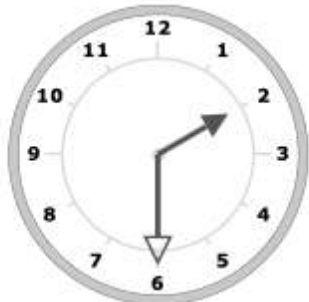


PASSING TIME: QUARTER HOURS

NAME: _____

DATE: _____

Write the time for each pair of clocks. Then find the amount of time that has passed between the two times.



2:30 p.m.



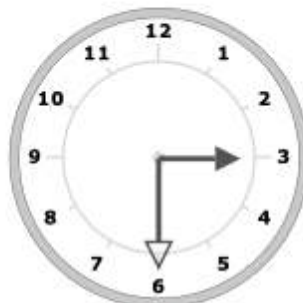
4:45 p.m.

How much time has passed?

2 hrs 15 mins



10:15 a.m.



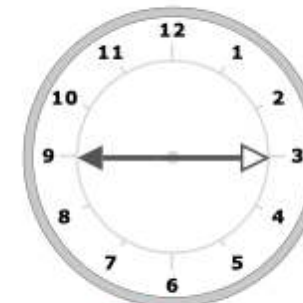
3:30 p.m.

How much time has passed?

5 hrs 15 mins



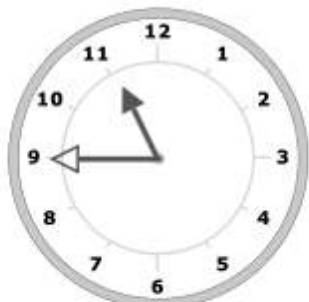
12:30 p.m.



9:15 p.m.

How much time has passed?

8 hrs 45 mins



11:45 a.m.



5:00 p.m.

How much time has passed?

5 hrs 15 mins

