

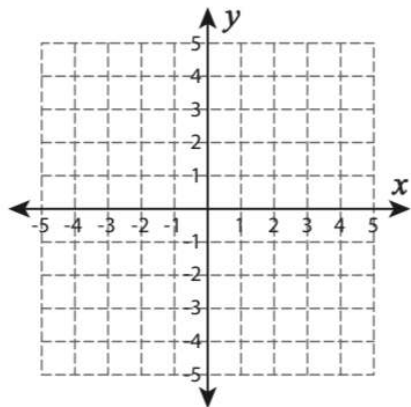
# IDENTIFYING TYPES OF SLOPES

NAME: \_\_\_\_\_

DATE: \_\_\_\_\_

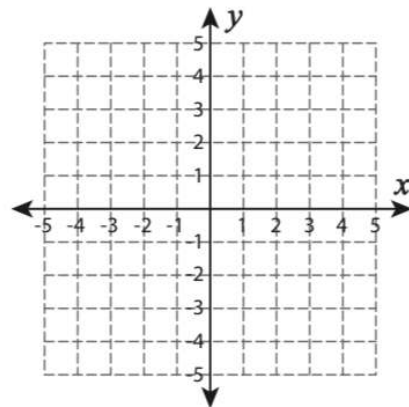
Plot the line from the coordinates provided and identify the type of slope shown.

1)  $(1,4)$   $(-3,2)$



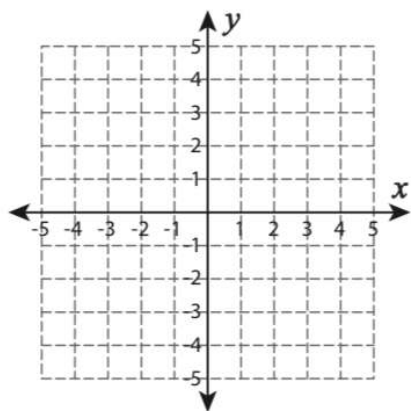
\_\_\_\_\_

4)  $(2,2)$   $(2,-3)$



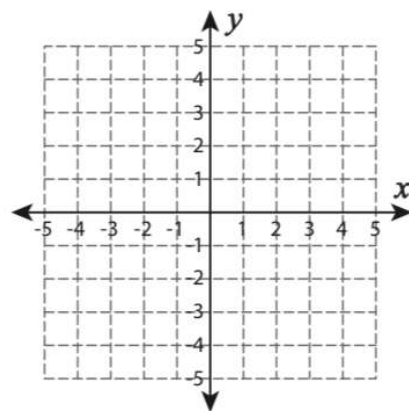
\_\_\_\_\_

2)  $(0,5)$   $(3,1)$



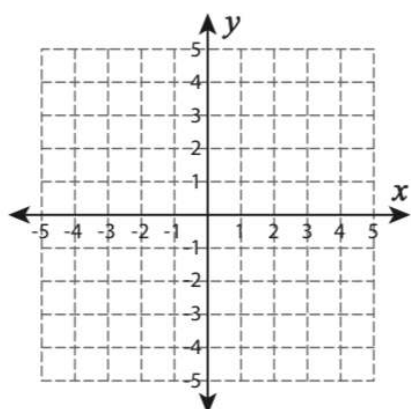
\_\_\_\_\_

5)  $(-5, 3)$   $(1,3)$



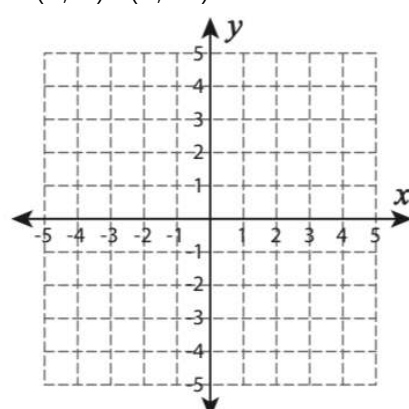
\_\_\_\_\_

3)  $(-3, -2)$   $(1, 2)$



\_\_\_\_\_

6)  $(2, 4)$   $(4, -1)$



\_\_\_\_\_

