

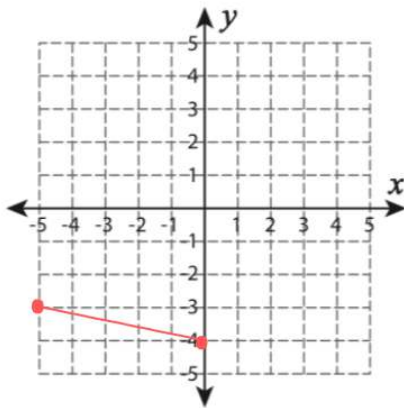
CALCULATING THE SLOPE

NAME: _____

DATE: _____

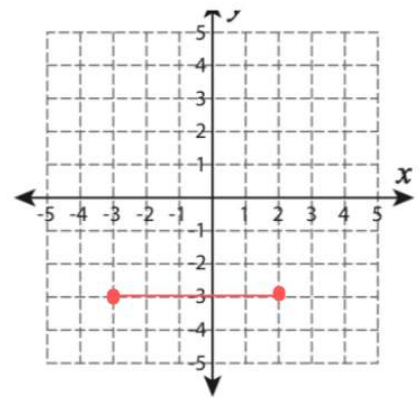
Graph a line through the given pair of points.
Find the slope.

1) (5,-3) (0,-4)



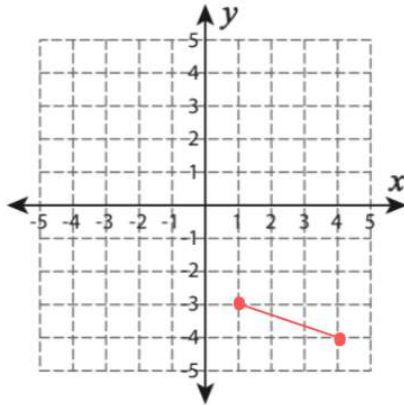
Slope = 1/5

4) (-3,-3) (2,-3)



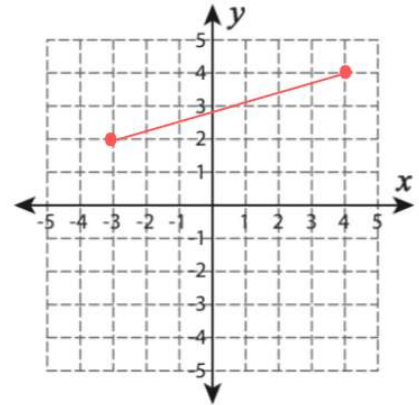
Slope = 0

2) (4,-4) (1,-3)



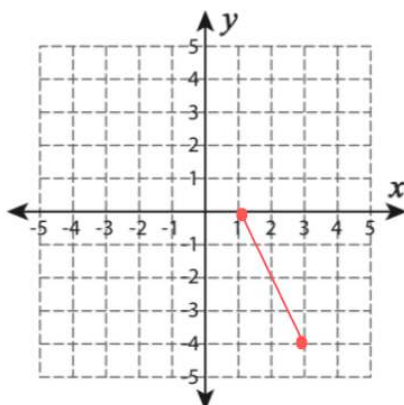
Slope = -1/3

5) (-3, 2) (1, 4)



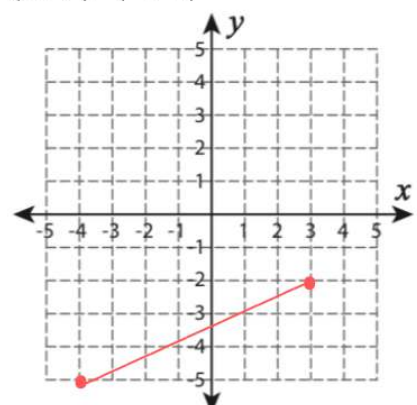
Slope = 1/2

3) (3,-4) (1, 0)



Slope = -2

6) (3, -2) (-4, -5)



Slope = 3/7

